

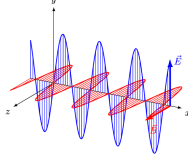







<p>The Nature of Waves </p> <p>There are 2 categories of waves. State what they are and describe them.</p> <div style="display: flex; justify-content: space-around;">   </div>	<p style="text-align: right;">mrbakerssciencestuff.com</p> <p style="text-align: right;">1 of 4</p>
<p>The Nature of Waves </p> <p>Describe the difference between transverse and longitudinal waves.</p>	<p style="text-align: right;">mrbakerssciencestuff.com</p> <p style="text-align: right;">2 of 4</p>
<p>The Nature of Waves </p> <p>Draw and label a transverse wave</p>	<p style="text-align: right;">mrbakerssciencestuff.com</p> <p style="text-align: right;">3 of 4</p>
<p>The Nature of Waves </p> <p>Draw and label a longitudinal wave.</p>	<p style="text-align: right;">mrbakerssciencestuff.com</p> <p style="text-align: right;">4 of 4</p>

Instructions:

- (1) Answer the questions.
- (2) Watch the clip and correct your answers.
- (3) Print out, fold over on dotted line and make into flashcards.
- (4) Use for retrieval quizzes.

