






<p>Reflection </p> <p>What type of images are formed in a mirror? What does this mean?</p>	<p>mrbakerssciencestuff.com</p> <p>1 of 3</p>
<p>Reflection </p> <p>Draw an object and its mirror image. What are the 3 rules that describe a mirror image in a plane mirror?</p>	<p>mrbakerssciencestuff.com</p> <p>2 of 3</p>
<p>Reflection </p> <p>Draw the diagram showing a ray of light being reflected from a plane mirror. What is the law of reflection?</p>	<p>mrbakerssciencestuff.com</p> <p>3 of 3</p>

**Instructions:**

- (1) Answer the questions.
- (2) Watch the clip and correct your answers.
- (3) Print out, fold over on dotted line and make into flashcards.
- (4) Use for retrieval quizzes.

